

Exercice 1

Compléter :

▶1. $\frac{790}{100} = \dots$

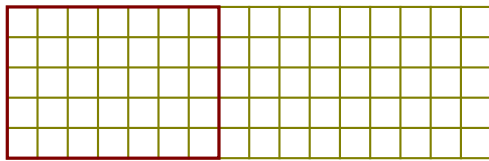
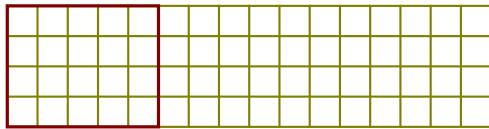
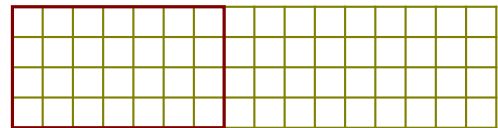
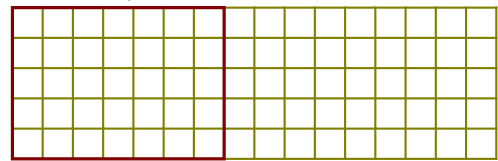
▶2. $\frac{\dots}{100} = 20,16$

▶3. $\frac{7\,615}{\dots} = 7,615$

▶4. $\frac{\dots}{10} = 864,5$

▶5. $\frac{16\,300}{\dots} = 1,63$

▶6. $\frac{8\,337}{100} = \dots$

Exercice 2▶1. Colorer $\frac{9}{5}$ de ce rectangle.▶2. Colorer $\frac{12}{12}$ de ce rectangle.▶3. Colorer $\frac{5}{7}$ de ce rectangle.▶4. Colorer $\frac{12}{7}$ de ce rectangle.**Exercice 3**

▶1. Compléter :

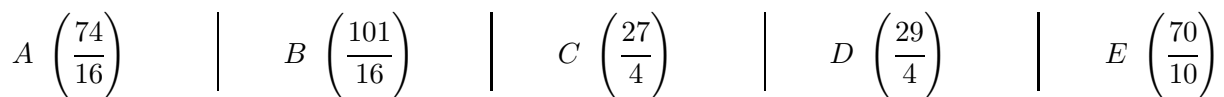
a) 1 unité = ... seizièmes

b) 1 unité = ... quarts

c) 4 unités = ... seizièmes

d) 4 unités = ... quarts

▶2. Sur la demi-droite ci-dessous, placer les points d'abscisse donnée :



▶3. Compléter les abscisses des points suivants :

a) $F \left(\frac{\dots}{16} \right)$

b) $F \left(\frac{\dots}{4} \right)$

c) $G \left(\frac{\dots}{16} \right)$

d) $G \left(\frac{\dots}{4} \right)$

**Exercice 4**

Compléter :

▶1. $\frac{6\,071}{\dots} = 60,71$

▶2. $\frac{82\,830}{10\,000} = \dots$

▶3. $\frac{43\,250}{1\,000} = \dots$

▶4. $\frac{29\,870}{\dots} = 2,987$

▶5. $\frac{8\,064}{\dots} = 8,064$

▶6. $\frac{4\,532}{100} = \dots$